


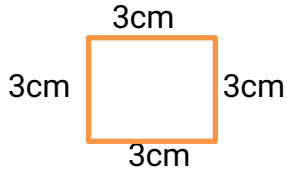


FREEDOM EXAMS
END OF THIRD TERM EXAMINATION
MATHEMATICS – BS 3
SECTION A

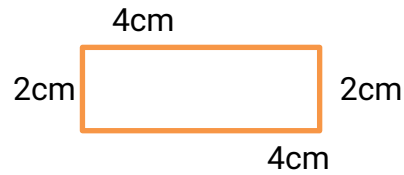
1. Three friends shared 12 oranges equally. How many oranges did each get?
a. 2 b. 3 c. 4
2. Four (4) children shared 20 toffees. How many toffees did each get?
a. 4 b. 5 c. 6
3. Complete: $374 + 253 = \underline{\quad} + 374$. a. 374 b. 253 c. 243
4. Complete: $\underline{\quad} + 157 = 157 + 256$. a. 157 b. 147 c. 256
5. What is $61 - 26$? a. 34 b. 35 c. 36
6. Solve $91 - 36$. a. 55 b. 56 c. 57
7. The top part of a fraction is called a. denominator b. down c. numerator
8. The bottom part of a fraction is called
a. denominator b. down c. numerator
9. Which of these is the answer for this fraction? 
a. $\frac{1}{2}$ b. $\frac{1}{3}$ c. $\frac{1}{4}$
10. A farmer bought a cutlass at GHS 14. He gave the seller GHS 20. How much change should the farmer receive? a. GHS 6 b. GHS 7 c. GHS 8
11. Benedicta bought a book at GHS 17. She paid GHS 20. How much change was given to her? a. GHS 5 b. GHS 4 c. GHS 3
12. Which is the best estimate of the length for the object?
a. 15cm b. 35cm c. 28 cm
13. What about this?  
a. 18cm b. 4cm c. 100cm
14. Describe the shape of this figure



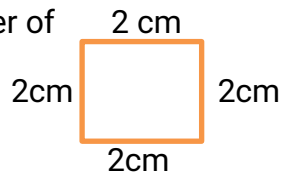
- a. Regular b. Irregular c. None

15. What is the shape of this figure ?

- a. Regular b. Irregular c. None



16 Find the perimeter of



- a. 4cm b. 6cm c. 8cm

17. A gram is very

- a. heavy b. light c. both

18. The kilogram is used for objects.

- a. lighter b. smaller c. heavier

19. 2kg = ___?

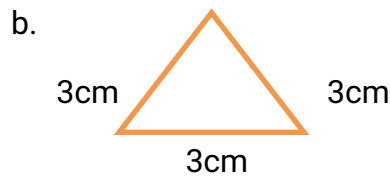
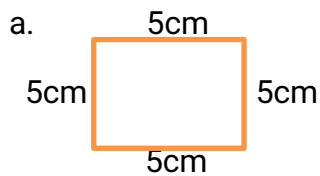
- a. 1000g b. 2000g c. 5000g

20. What is the *ml* of a sachet of water?

- a. 300ml b. 400ml c. 500ml

SECTION B

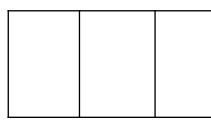
1. Find the perimeter of the following:



2. Colour the given fractions.




a.



$2/3$

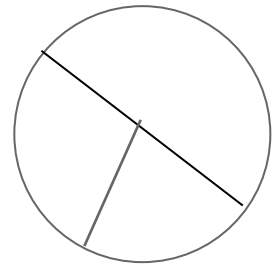
b.



$4/6$

c.

$1/3$



3. Change the following to kilogram:

i. $600\text{g} = \underline{\hspace{2cm}}$

ii. $3000\text{g} = \underline{\hspace{2cm}}$

iii. $8000\text{g} = \underline{\hspace{2cm}}$

iv. $15000\text{g} = \underline{\hspace{2cm}}$

v. $2000\text{g} = \underline{\hspace{2cm}}$

4. Solve the following:

i) $20 \div 5 = \underline{\hspace{2cm}}$

ii) $5 \times 6 = \underline{\hspace{2cm}}$

$$\begin{array}{r} \text{iii) } 338 \\ + 484 \\ \hline \\ \hline \end{array}$$

$$\begin{array}{r} \text{iv) } _ 611 \\ \quad 222 \\ \hline \\ \hline \end{array}$$