

TRENDING-GHANA EXAMINATIONS CONSULTS

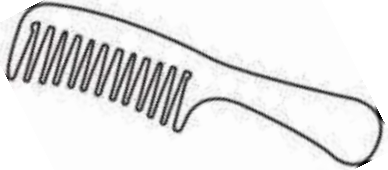



(INTELLIGENCE IS OUR HALLMARK)

SUBJECT: GHANAIAN LANGUAGE AND CULTURE

Yi akwan ebien no mu kor fawie asentɔw a ɔfa Nkyia na ne ngyedo ho no

1. Ewiaber wɔ kyia dɛn? a. Mema wo adwe b. Mema wo aha
2. Nkyia bɛn na ne ngyedo yɛ edwumaye? a. Edwuma o! b. Mema wo akye
3. Borɔnya ber wokyaia dɛn? a. Afrenhyia pa b. Afenkɔm bɔto hɛn
4. Anapa wokyaia dɛn? a. Mbo b. Memawoakye
5. Aber bɛn na wokyaia obi Mema wo adwe. a. Ewimber b. Anapa

Kyerɛw efie ndzɛmba a ɔwɔ ase ha yi

6.  a. Afe b. bokitsi
7.  a. Sekan b. bokitsi
8.  a. Dadzesen b. kwanta
9.  A. Mena b. wodur


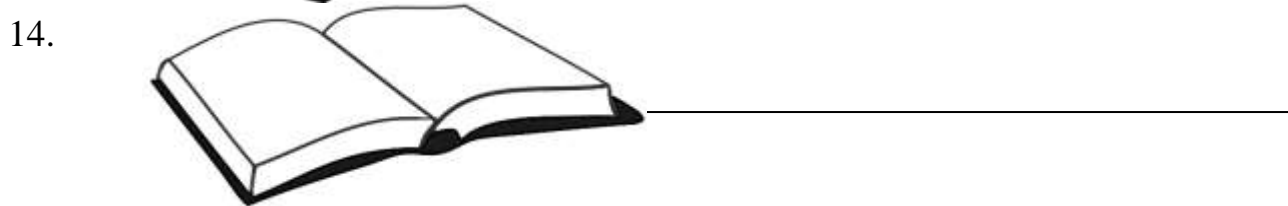
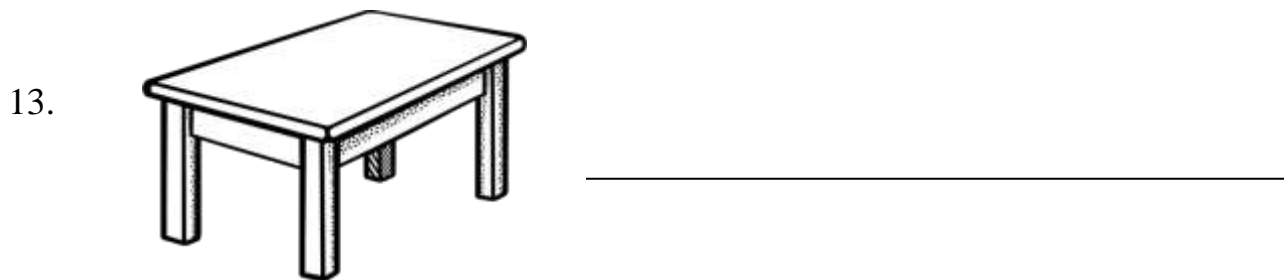
Kyerɛdza wɔdze fie ndzɛmbayi mu bianayɛ

10. Yɛdzepɛpa hen ho. a. tam b. entuhu

11. Yesiw fufur wɔ..... mu. a. prɛtse b. wodur

12. Yɛdzesaw nkwan. a. kwanta b. Afe

Kyerɛw ndzɛm ba iynom edzin



SUBJECT: RME

1. All the following are living things except
a. dog b. cat c. television
2. Materials or things that do not have life are known as
a. living things b. Non-living things
3. Which of these is a characteristic of living things?
a. it can grow and die b. It cannot eat c. It cannot walk
4. There are Groups of living things.
a. one b. two c. three

Respond to the question below by saying “Yes they do” or “No they don’t”

5. Do birds fly?
a. Yes they do b. No they don’t
6. Does a cat move or walk?
a. No they don’t b. Yes they do
7. Does a dog grow?
a. Yes they do b. No they don’t
8. All chairs have babies?
a. Yes they do b. No they don’t
9. All plants are
a. Non living things b. Living things
10. Animals need.....
a. stone b. air c. pencil
11. Animals take in food into the body or stomach through their.....
a. nose b. buttocks c. mouth
12. Animals can young ones. a. reproduce b. drink c. clap

Answer the True or False questions

13. Animals have eyes. True or False
14. All plants are tall. True or False

- 15.Plants do not walk. True or False
- 16.Living things and non-living thing are the same. True or False
- 17.Living things die. True or False
- 18. Non-living things grow. True or False
- 19. Living things eats. True or False
- 20.Living things cry. True or False

SECTION B

1. Draw one (1) living thing and two (2) non- living things.

3. State one (1) difference between living and non-living things.

.....

.....

.....

ANSWER ALL QUESTIONS

1. God is a
a. Spirit b. Humankind
2. The Bible says, God lives in a place called.....
a. Church b. Heaven
3. God is only
a. Two b. one
4. Who made the world?
a. people b. God
5. God created humankind with
a. Dust b. house
6. The Bible says God created the world in days.
a. six b. seven
7. Who is God?
a. He is the creator b. He is a man
8. Muslims called God
a. Mawu b. Allah

ANSWER THE “YES”OR “NO” QUESTIONS.

9. God is love? Yes or No
10. Is God everywhere? Yes or No
11. God is not caring. Yes or No
12. Can you see God? Yes or No
13. Are you a Christian? Yes or No

ANSWER THESE FEW QUESTIONS

14. Muslims believe that Created the world.
a. Imam b. Allah
15. Who created humankind?
a. Mohammed b. Allah
16. Allah means.....
a. God b. Jesus

ANSWER THESE QUESTIONS

Creation Story, Traditional Beliefs

17. The Akan traditional call God.....
a. Sasabonsam b. Onyankopon

18. The traditionalists believe that Created all humankind
a. ɔbosom b. Onyankopɔn

ANSWER THE FOLLOWING QUESTIONS

19. The last thing God created was what?
a. Adam and Eve b. Joseph and Mary
20. On the first day, God created.....
a. school and houses b. Heaven and Earth

SECTION B

1. Draw two (2) things God created.




2. Draw two (2) things man created.

SUBJECT: CREATIVE ARTS

CHOOSE THE CORRECT ANSWER

1. Doodling is the continuous drawing ofa. Lines b. Letters
2. Doodling should be drawn on aa. Water b. Surface
3. Which of the following is a drawing tool? a. Chalk b. Car
4. is used as for doodling. a. Penb. Paper
5. Floor is used as a for doodling. a. Surfaceb. Acts
6. How many types of shapes do we have?a. Two b. One
7. The cut-out of the outline of an object is called..... a. Template b. Timing

IDENTIFY THE SHAPES

8.  a. Curved line b. Vertical line
9.  a. Zigzag line b. Horizontal line
10.  a. Diagonal b. Curved line
11. Lines can be vertical or a. Horizontal b. Dark

ANSWER THE TRUE OR FALSE QUESTIONS

12. Tables and chairs are all examples of man-made objects. a. True b. False
13. A pineapple is an example of natural objects. a. True b. False
14. Template is a cut-out of an object. a. True b. False
15. Doodling is done freely. a. True b. False
16. Doodling is the continuous drawing of lines. a. True b. False
17. Curved objects have life. a. True b. False
18. Natural objects have life. a. True b. False
19. Man-made objects do not have life in them. a. True b. False
20. Regular shapes and irregular shapes are not the same. a. True b. False

SECTION B

Draw the outline of the following shapes and colour them with your crayon

1. Rectangle

2. Triangle

3. Circle

4. Square

5. Circle

6. Pentagon

Draw and colour two (2) examples of natural and man-made objects.

SUBJECT: ENGLISH LANGUAGE

READ THE PASSAGE AND ANSWER THE FOLLOWING QUESTIONS

This is Miss Mary Sam. She is 25 years old. She is a teacher. She teaches P1 class. Miss Mary Sam has told the children in P1 to be nice to one another. She has taught them how to greet the people they meet.

Kofi and Ama are in P1. They are both 6 years old. Kofi met Ama and he greeted her.

Answer the following questions

1. How old is Miss Mary Sam?
-
2. What class does Miss Mary Sam Teach?
-
3. What did Kofi do when he met Ama?.....
-
4. How old is Amaand Kofi.....
-
5. Who is Miss Mary Sam?.....

Write down the small letters against each block letter

6. A
7. B.....
8. N.....
9. H.....
10. M.....
11. G.....

Choose the correct answer

1. I have apple in my bag. (a, an)
2. I saw orange on the table. (an, a)

Underline the nouns in the following sentences

1. Kwesi is looking at the picture.
2. The ant has short legs
3. The elephant cannot walk.

Underline the adjective in the following sentences

1. My table is small.
2. This is a red pencil
3. This bread is brown in colour.

Fill in the missing letters using these letters (L,H,S,C,D)

1. H o ue
2. T o i.....e t
3. C o.....o a
4. R ai o

Copy these words in lower case

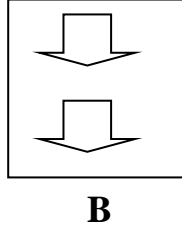
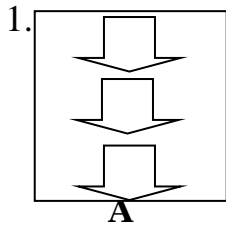
I will be a prominent person in future

COMPLETE THE FOLLOWING SENTENCES

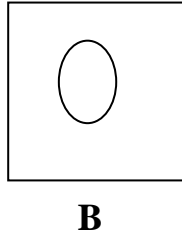
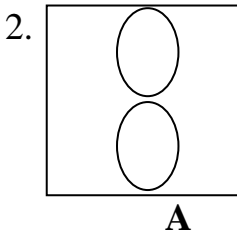
- My name is
- I am in class.....
- The name of my school is
- My teacher's name is.....
- The name of my father is
- The name of my mother is
- The food I like best is
- The game I like best is

SUBJECT: MATHEMATICS

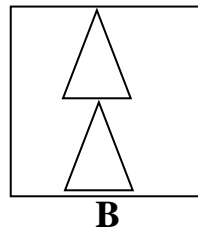
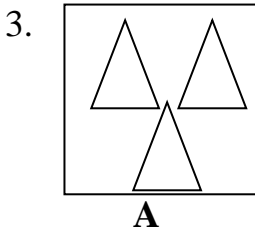
Match the objects in box “a” and “b” complete the sentence



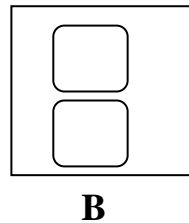
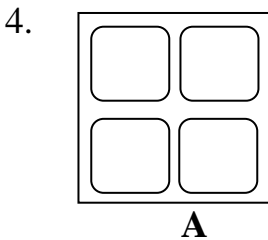
There are less objects in..... than in



There are less objects in than in

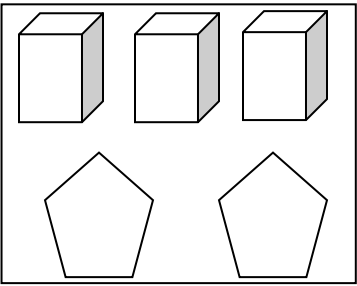




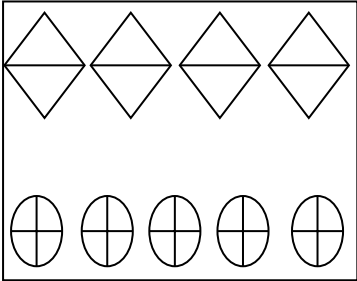
There are more objects inthan



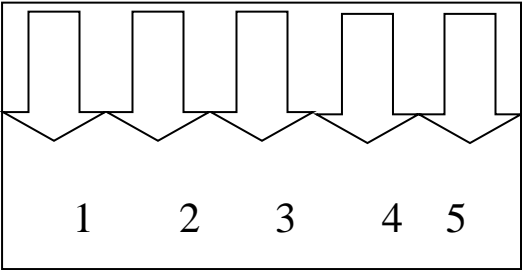
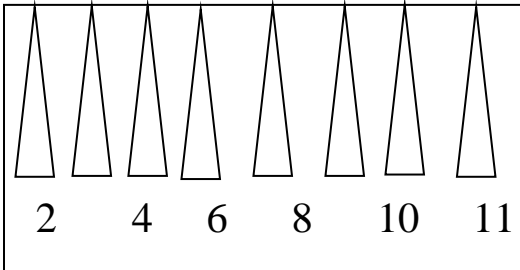
There are more objects inthan

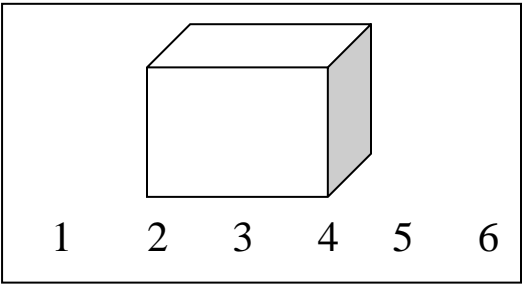

Match and tick the group with one more object

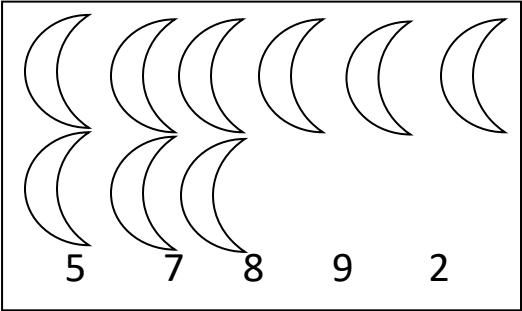
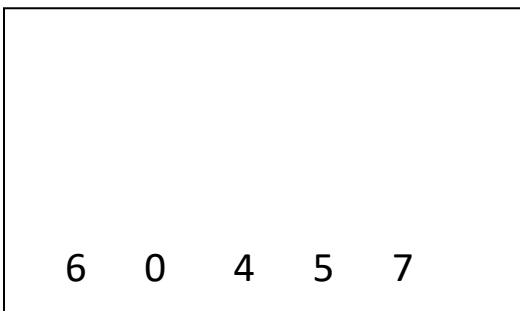
5.  

6.  

How many objects are there in each group? Count and circle the correct figure.

7.  

8.  

9.  

SECTION B

Copy and complete the figure and words in each box

10.

	5		7		9	
Word	five	six				ten

	7				11	
Word	seven			ten		

11.

Write the following numbers in words.

12. 5 =.....

13. 8 =.....

14. 20 =.....

15. 17 =.....

Write the figure representing the following

16. Eighteen =

17. Eleven =

18. Twenty nine =

19. Thirty- five =

Add the following

20. $4 + 2 =$

21. $0 + 10 =$

22. $5 + 3 =$

23. $5 + 5 =$

24. $2 + 8 =$

25. $13 + 5 =$

26. $7 + 4 =$

27.
$$\begin{array}{r} 4 \\ + 4 \\ \hline \\ \hline \end{array}$$

29.
$$\begin{array}{r} 7 \\ + 6 \\ \hline \\ \hline \end{array}$$

30.
$$\begin{array}{r} 4 \\ + 2 \\ \hline \\ \hline \end{array}$$