

PB PAGEZ EXAMS

END OF 1ST TERM EXAMINATION

MATHEMATICS

NAME..... CLASS TWO DATE.....

ANSWER ALL THE QUESTIONS

1. $10 + 5 = \square$ A) 14 B) 18 C) 15

2. $25 + 10 = \square$ A) 21 B) 25 C) 35

3. $14 + 3 + 5 = \square$ A) 19 B) 20 C) 14

4. $35 - 20 = \square$ A) 15 B) 10 C) 35

5. $8 + 12 = \square$ A) 23 B) 20 C) 19

6. 10

+ 56

_____ A) 66 B) 56 C) 65

Find the missing number

7. $31 + 22 = \square + 31$ A) 31 B) 22 C) 56

8. $39 + 1 = \square + 39$ A) 1 B) 39 C) 40


9. $17 - 5 = \square + 17$ A) 17 B) 5 C) 0

Match the shape to its name

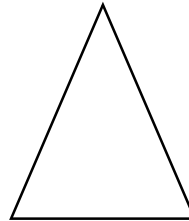
Triangle



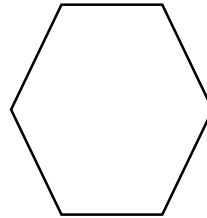
10. Square




11. Rectangle



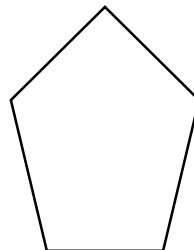
12. Circle



13. Pentagon



14. Hexagon



Write the name of the shape and the number of vertices it has

Shape	Name	Number of vertices
