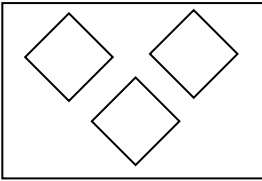


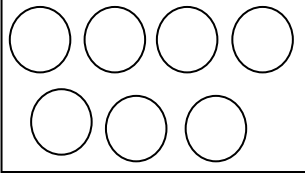
FREEDOM EXAMS
1ST MID-TERM EXAMINATION 2022
CLASS: KG 2
SUBJECT: NUMERACY


NAME:

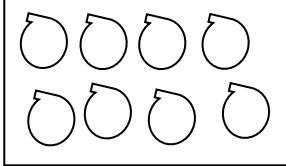
DATE:

How many objects are in the group? (16 marks)

1. 

2. 

3. 

4. 

Put in the correct symbol: <, >, = (16 marks)

5. 4 _____ 4

7. 20 _____ 18

6. 12 _____ 13

8. 6 _____ 11

Put the numbers in order from small to big. (8 marks)

9. 12, 8, 10 _____ _____ _____

10. 3, 8, 4 _____ _____ _____

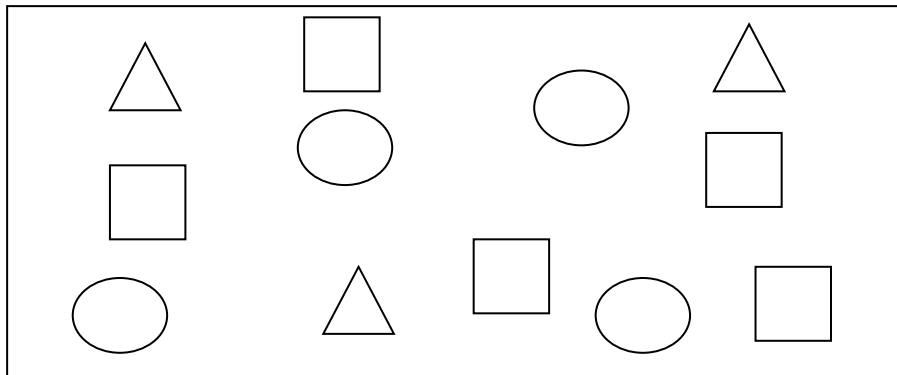
Write the missing numbers. (12 marks)


11. 12, _____, 14.


12. 15, 16, _____.


13. _____, 5, 6.

Classify the following shapes. Count each shape. (12 marks)



14. 

15. 

16. 

17. Which shape is one more than triangles? (3 marks)

18. Which shape is one less than the circles? (3 marks)

Complete the following. (20 marks)

19. $3 + 3 =$

20. $4 + 6 =$

21. $3 + 5 =$

22. $6 + 3 =$

Use **heavier than** or **lighter than** to compare the weight. (10 marks)



23. The mango is _____ the pineapple.



24. The soap is _____ the radio.